


Figure Classification

Directions

In each of these questions the first three figures are similar in some way. Decide how they are the same. Then choose the figure from the answer choices that goes with them. Look at the example below.

Example

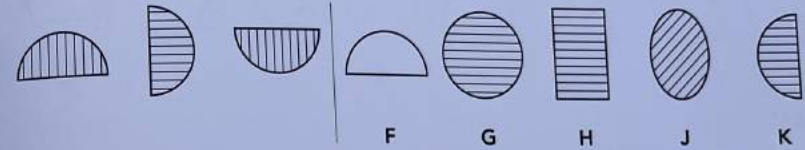


Think about how the first three figures are similar. Each figure is shaded and has four sides. Now look at the answer choices. Find the one that is shaded and also has four sides. The correct answer is D. This is how you would show the answer:

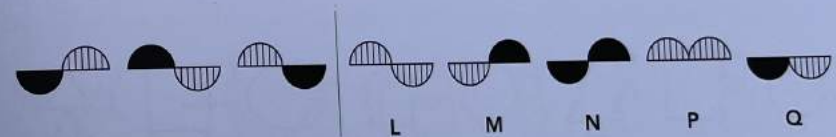


Now try some practice questions. Mark your answer choices by filling in the correct box on the answer sheet. Remember, if you want to change your answer, rub out your first choice and mark your new letter choice.

Practice 1



Practice 2



Do all of the questions in this test the same way. Try to answer every question.

You will have 10 minutes to work on this test.