


SOLIHULL PREPARATORY SCHOOL

6+ ASSESSMENT

MATHS

SAMPLE PAPER



SOLIHULL

SOLIHULL PREPARATORY SCHOOL 6+ ASSESSMENT

MATHS

SAMPLE PAPER

The maths assessment will be teacher led and will take approximately 30 minutes to complete.

Below is a sample of the type of questions your child could be asked about their learning in maths.

1 Joe has 6 books. Kate has 3 books.

How many books do they have altogether?

2 Look at these coins:



Tick the 20p coin.

3 What number comes next in the pattern?

15	20	25	30	35	
----	----	----	----	----	--

4 Put a circle around the third face.

Put a cross through the fifth face.



5 Here is a number track.

Write in the missing numbers in the number track.


29		31	32	33	34		36	37
----	--	----	----	----	----	--	----	----

6 Two of the sums below equal 15.

Tick both of them.

$$\begin{array}{rcl} 11 & + & 5 \\ 7 & + & 8 \\ 18 & - & 4 \\ 17 & - & 2 \end{array}$$

7 How many pencils are there altogether?




pencils

8 Look at the number sentence.
Write in the missing number.

$$\square - 4 = 8$$

9 May has 12 sweets. She eats half.
How many sweets does she have left?



May has		sweets left
---------	--	-------------

10



Jake gets up at 9 o'clock.

Circle the clock that shows 9 o'clock.

Mel gets up one hour later than Jake. What time does Mel get up?

	o'clock
--	---------