



1. Look at the calculation below.

$$391 \times 73 = 28543$$

Use this to help you complete the calculation below.

$$39.1 \times 0.73 = \underline{\hspace{2cm}}$$

www.TransferReady.co.uk

2. Look at the four numbers below. Tick  the number in which the 3 stand for 30

259.3

593.2

932.5

325.9

www.TransferReady.co.uk

3. Write the answers to the following calculations.

$$297.1 \times 100 = \underline{\hspace{2cm}}$$

$$702 \div 100 = \underline{\hspace{2cm}}$$

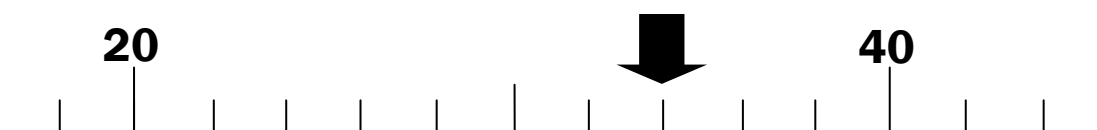
www.TransferReady.co.uk

4. Complete the number statement below by writing the missing number in the space provided.

$$25 \times 9 = 15 \times \underline{\hspace{2cm}}$$

www.TransferReady.co.uk

5. Look at this number line. What number does the arrow point to? Write your answer in the space provided.



The arrow points to           .

www.TransferReady.co.uk

Read the passage and answer the questions by ticking  the correct answer.

from **A Bird Came Down**

*Emily Dickinson*

A bird came down the walk:	line 1
He did not know I saw;	line 2
He bit an angle-worm in halves	line 3
And ate the fellow, raw.	line 4
And then he drank a dew	line 5
From a convenient grass,	line 6
And then hopped sidewise to the wall	line 7
To let a beetle pass.	line 8
He glanced with rapid eyes	line 9
That hurried all abroad,--	line 10
They looked like frightened beads, I thought;	line 11
He stirred his velvet head	line 12

6. Which **one** of these words, used in line 12, is used as an adjective?

- He
- stirred
- velvet
- head

www.TransferReady.co.uk

7. The verb, 'glanced', in line 9 means to ...

- To jump
- To dance
- To look
- To eat

www.TransferReady.co.uk

8. Based on your understanding of the above poem, circle the most appropriate word to complete the sentence below:

The bird in the poem was **sleeping** **flying** **eating**.

www.TransferReady.co.uk

9. Look at **verse two** of the poem. Find the **word** which is **closest in meaning** to **handy**. Write your answer in the space below.

\_\_\_\_\_

www.TransferReady.co.uk

10. Only one of these numbers is a multiple of 3? Tick  the correct answer.

53

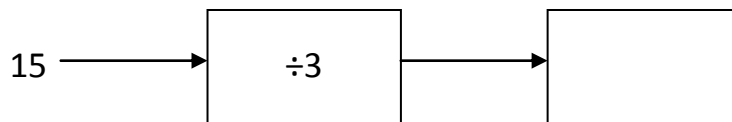
54

55

56

www.TransferReady.co.uk

11. Write the output of this function machine in the box provided.




www.TransferReady.co.uk

12. What are the missing numbers from this sequence of numbers? Write the missing numbers in the spaces provided.

6 , \_\_\_\_\_ , 18 , 24 , \_\_\_\_\_

www.TransferReady.co.uk

13. Ben looks at this clock as he is leaving his house to meet friends, who are a 40 minute walk away. What time will he arrive? Write your answer in the space provided.



\_\_\_\_\_ pm.

www.TransferReady.co.uk

14. Look at the list of **three verbs** below. Each verb is written in the past tense. Write the **present tense** of each of the verbs in the spaces provided. **Be careful with your spelling.** The first one has been done for you.

sat	sit
drew	
ate	

15. Count the number of nouns in the following sentence. Tick  the correct statement below.

Eleven owls licked eleven little liquorice lollipops.

- There are no nouns in the sentence
- There is one noun in the sentence
- There are two nouns in the sentence
- There are three nouns in the sentence

16. Write the countries listed below **in alphabetical order** in the spaces provided. The first one has been done for you.

**Cambodia**

**Chad**

**Cameroon**

**Canada**

Cambodia \_\_\_\_\_  
\_\_\_\_\_  
\_\_\_\_\_  
\_\_\_\_\_

17. Read each sentence below and look carefully at the **underlined** words. Tick  the sentence where the underlined word is used as a **verb**.

- John and Katie were having a row
- Bob planted that row of trees
- Rosie is preparing to row the boat
- Katie's new house is at the end of a row

---

www.TransferReady.co.uk

18. Look at the calculation below. **Complete** the calculation by **writing a number** in the **box** below.

$$\begin{array}{r}
 7 \quad 4 \quad 1 \\
 - \quad 3 \quad 7 \quad 3 \\
 \hline
 \square \quad 6 \quad 8
 \end{array}$$

---

www.TransferReady.co.uk

19. What is the **product** of 21.2 and 50? Write your answer in the space below.

\_\_\_\_\_

---

www.TransferReady.co.uk

20. Complete the number statement below by writing the missing number in the space provided.

$$7 \times 33 = 21 \times \underline{\hspace{2cm}}$$

---

**END OF TEST. LOOK OVER YOUR ANSWERS UNTIL TIME IS UP.**

# Answers to Step 1 Sample Paper

1.	28.543
2.	932.5 (3 <sup>rd</sup> option box)
3.	29710   0.702
4.	15 [hint break down to factors: $25 \times 9 = 5 \times 5 \times 3 \times 3 = 5 \times 3 \times 5 \times 3 = 15 \times 15$ ]
5.	34 [hint: always keep counting to the next marked number to make sure you've got the scale right]
6.	Velvet
7.	To look (3 <sup>rd</sup> option box)
8.	eating
9.	convenient
10.	54 [hint: $5+4=9$ and 9 is a multiple of 3, so 54 is a multiple of 3]
11.	5
12.	6, <b>12</b> , 18, 24, <b>30</b>
13.	3:45 pm
14.	drew → draw   ate → eat
15.	2 nouns (3 <sup>rd</sup> option box)
16.	Cambodia; Cameroon; Canada; Chad
17.	Rosie is preparing to row the boat (3 <sup>rd</sup> option box)
18.	<b>368</b>
19.	1060 [hint: $21.2 \times 5 = 106$ ; $106 \times 10 = 1060$ ]
20.	11 [hint: $7 \times 33 = 7 \times 3 \times 11 = 21 \times \mathbf{11}$ ]